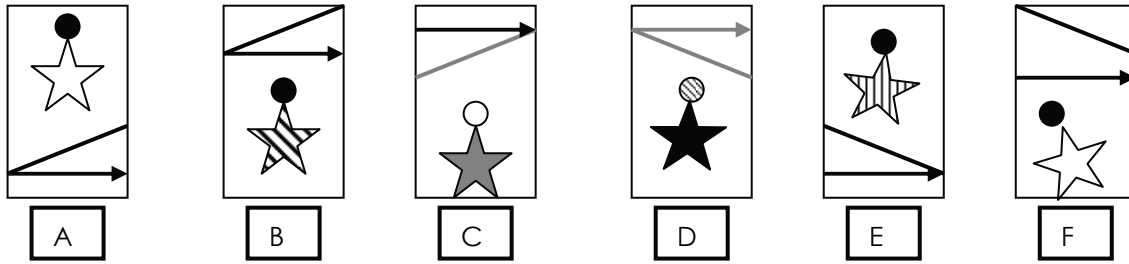


**Non Verbal Reasoning Practice Entrance Examination : Test 1**

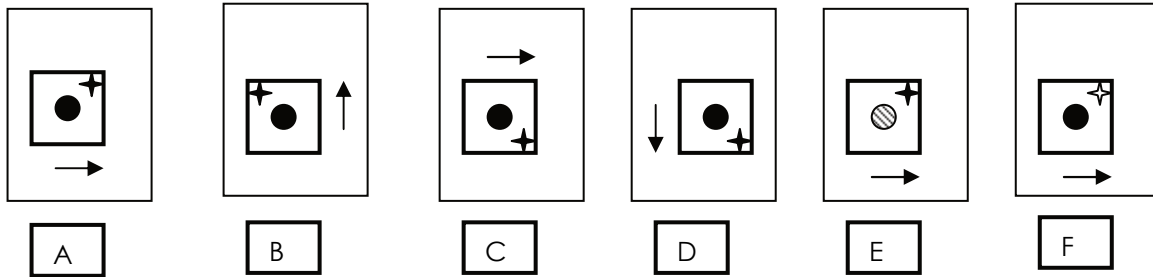
**Section one: Similarities and Differences**

Look at the shapes below. One of the shapes is most unlike the others. Choose which one.

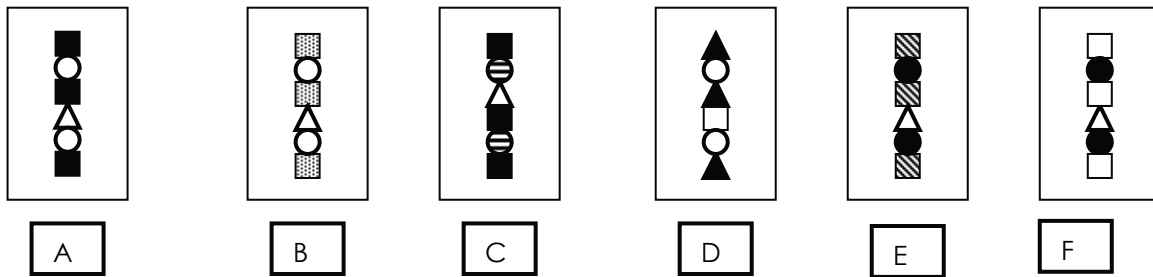
1



2



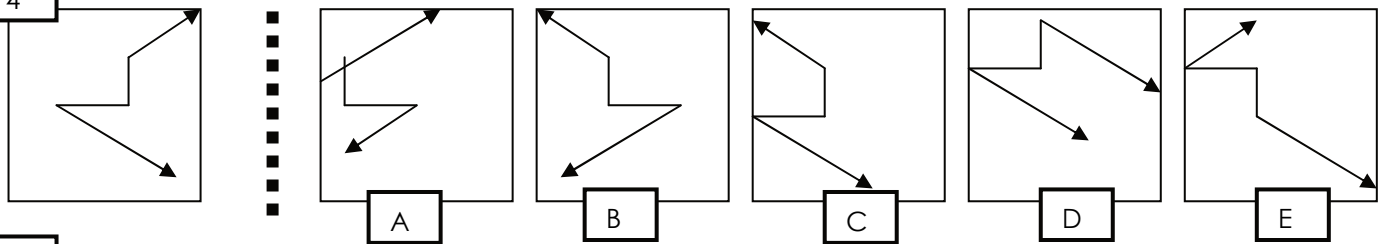
3



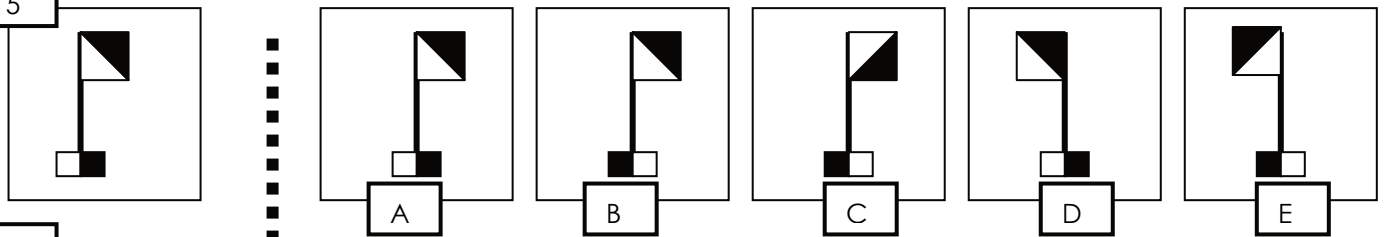
**Section two: Reflections**

Which shape on the right is the reflection of the shape on the left?

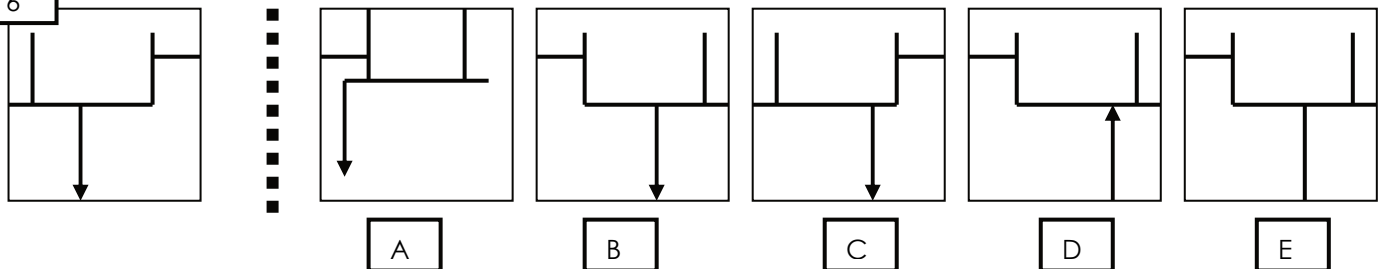
4



5



6



**Section three: Relationships**

From the given choices, work out which option best completes the group.

7


A	B	C	D	E

8


A	B	C	D	E

9


A	B	C	D	E

**Section four: codes**

Which code matches the shape or pattern given at the end of each line?

10

IF	IS	ZU	ZG	LF	?

IN	FS	LS	IS	ZF
A	B	C	D	E

11

BS	BL	BX	BT	RX	?

RL	RS	BX	LX	BR
A	B	C	D	E

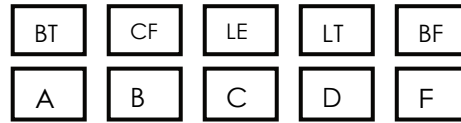
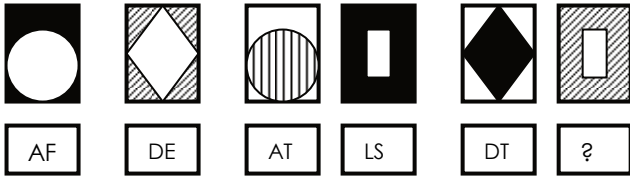
12

AZ	BZ	LY	AY	EF	?

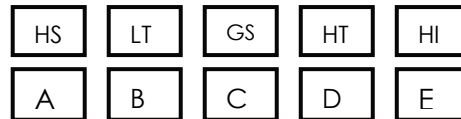
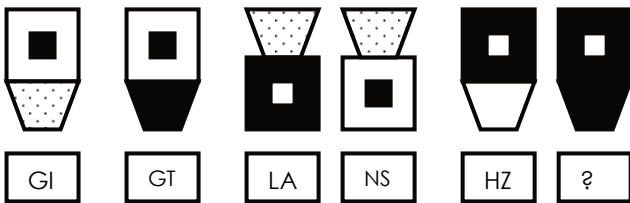
BL	EY	BY	BZ	LZ
A	B	C	D	E

**Which code matches the shape or pattern given at the end of each line? (continued)**

13



14





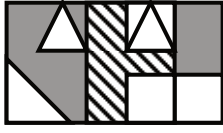


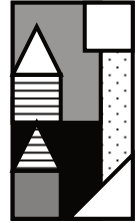
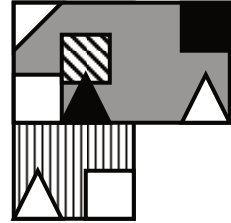
**END OF TEST: CHECK YOUR ANSWERS**

**Non Verbal Reasoning Practice Entrance Examination : Test 2**



**Section one: hidden shapes**

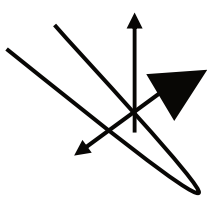
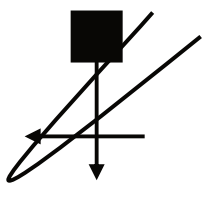
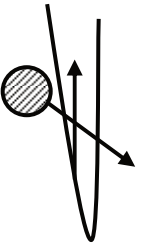
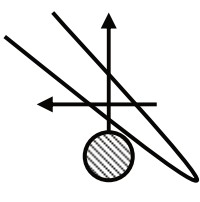
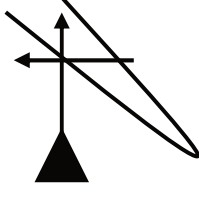
In which larger shape is the shape on the left hidden?

15  



    






A B C D E

16  

A B C D E







17  







A B C D E

**Section two: sequences**

Which one comes next?

18      

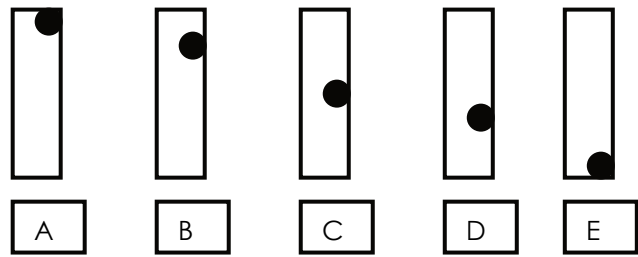
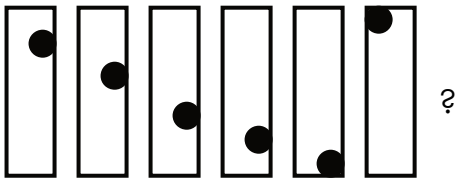
A B C D E

19      

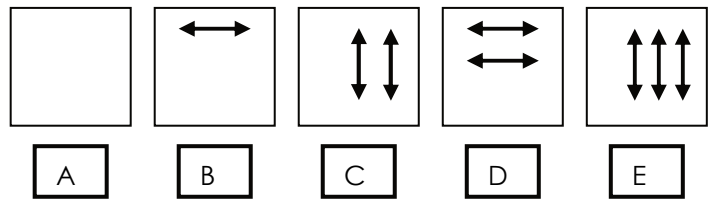
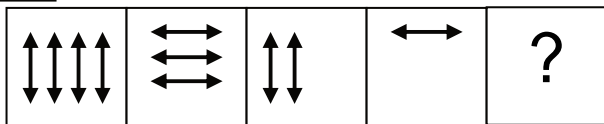
A B C D E

Which one comes next? (continued)

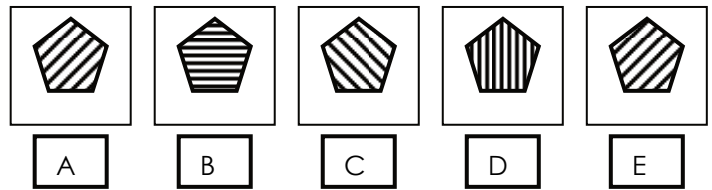
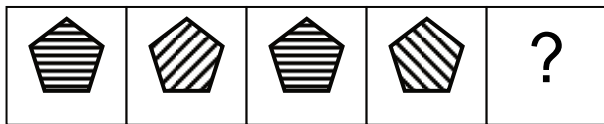
20



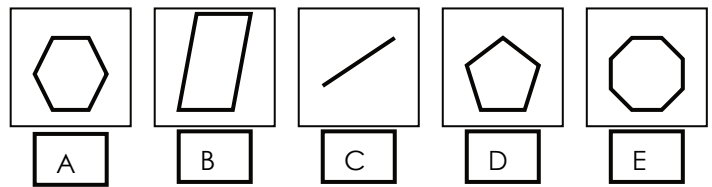
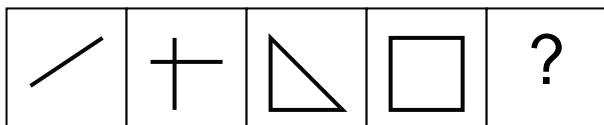
21



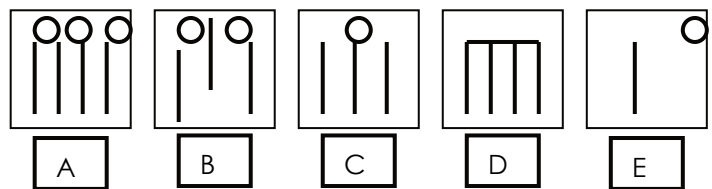
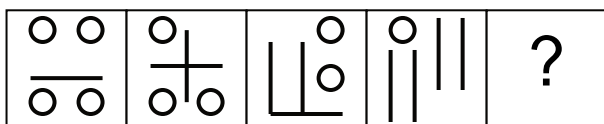
22



23



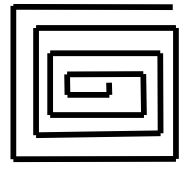





24



**Section three: rotations**

Only one of the figures on the right can be rotated to make the figure on the left. Choose which figure can be rotated to make the figure on the left.

25



A

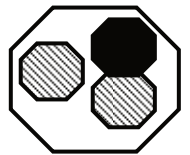
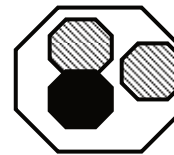
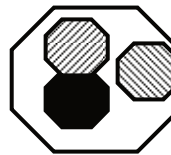
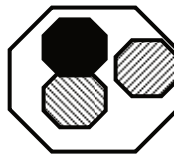
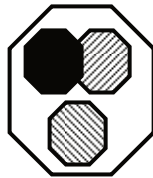
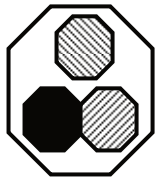
B

C

D

E

26



A

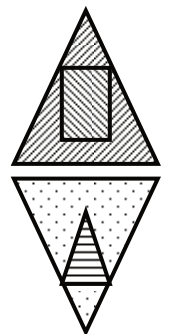
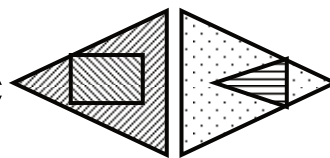


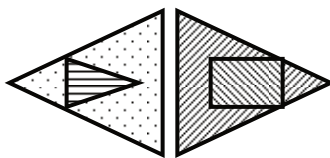
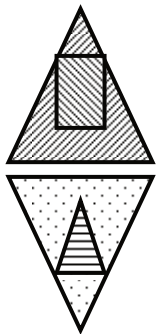
B

C

D

E

27



A

B

C

D

E

**Section four: analogies**

On the left of each question are two shapes. You must work out how they are connected. Now look at the third figure. Which of the five other figures that follow is related to the third in the same way as the second is to the first?

28

Options: A, B, C, D, E

29

Options: A, B, C, D, E

30

Options: A, B, C, D, E

**END OF TEST: CHECK YOUR ANSWERS**

## Non Verbal Reasoning Practice Entrance Examination : Test 1

**Name:** \_\_\_\_\_

### Section one: Similarities and Differences

1		2		3	
A	<input type="checkbox"/>	A	<input type="checkbox"/>	A	<input type="checkbox"/>
B	<input type="checkbox"/>	B	<input type="checkbox"/>	B	<input type="checkbox"/>
C	<input type="checkbox"/>	C	<input type="checkbox"/>	C	<input type="checkbox"/>
D	<input type="checkbox"/>	D	<input type="checkbox"/>	D	<input type="checkbox"/>
E	<input type="checkbox"/>	E	<input type="checkbox"/>	E	<input type="checkbox"/>
F	<input type="checkbox"/>	F	<input type="checkbox"/>	F	<input type="checkbox"/>

### Section two: Reflections

4		5		6	
A	<input type="checkbox"/>	A	<input type="checkbox"/>	A	<input type="checkbox"/>
B	<input type="checkbox"/>	B	<input type="checkbox"/>	B	<input type="checkbox"/>
C	<input type="checkbox"/>	C	<input type="checkbox"/>	C	<input type="checkbox"/>
D	<input type="checkbox"/>	D	<input type="checkbox"/>	D	<input type="checkbox"/>
E	<input type="checkbox"/>	E	<input type="checkbox"/>	E	<input type="checkbox"/>

### Section three: Relationships

7		8		9	
A	<input type="checkbox"/>	A	<input type="checkbox"/>	A	<input type="checkbox"/>
B	<input type="checkbox"/>	B	<input type="checkbox"/>	B	<input type="checkbox"/>
C	<input type="checkbox"/>	C	<input type="checkbox"/>	C	<input type="checkbox"/>
D	<input type="checkbox"/>	D	<input type="checkbox"/>	D	<input type="checkbox"/>
E	<input type="checkbox"/>	E	<input type="checkbox"/>	E	<input type="checkbox"/>

### Section four: codes

10		11		12	
A	<input type="checkbox"/>	A	<input type="checkbox"/>	A	<input type="checkbox"/>
B	<input type="checkbox"/>	B	<input type="checkbox"/>	B	<input type="checkbox"/>
C	<input type="checkbox"/>	C	<input type="checkbox"/>	C	<input type="checkbox"/>
D	<input type="checkbox"/>	D	<input type="checkbox"/>	D	<input type="checkbox"/>
E	<input type="checkbox"/>	E	<input type="checkbox"/>	E	<input type="checkbox"/>

13		14	
A	<input type="checkbox"/>	A	<input type="checkbox"/>
B	<input type="checkbox"/>	B	<input type="checkbox"/>
C	<input type="checkbox"/>	C	<input type="checkbox"/>
D	<input type="checkbox"/>	D	<input type="checkbox"/>
E	<input type="checkbox"/>	E	<input type="checkbox"/>

**Test 1 total:**



## Non Verbal Reasoning Practice Entrance Examination : Test 2

Name: \_\_\_\_\_

### Section one: hidden shapes

15		16		17	
A	<input type="checkbox"/>	A	<input type="checkbox"/>	A	<input type="checkbox"/>
B	<input type="checkbox"/>	B	<input type="checkbox"/>	B	<input type="checkbox"/>
C	<input type="checkbox"/>	C	<input type="checkbox"/>	C	<input type="checkbox"/>
D	<input type="checkbox"/>	D	<input type="checkbox"/>	D	<input type="checkbox"/>
E	<input type="checkbox"/>	E	<input type="checkbox"/>	E	<input type="checkbox"/>

### Section three: rotations

25		26		27	
A	<input type="checkbox"/>	A	<input type="checkbox"/>	A	<input type="checkbox"/>
B	<input type="checkbox"/>	B	<input type="checkbox"/>	B	<input type="checkbox"/>
C	<input type="checkbox"/>	C	<input type="checkbox"/>	C	<input type="checkbox"/>
D	<input type="checkbox"/>	D	<input type="checkbox"/>	D	<input type="checkbox"/>
E	<input type="checkbox"/>	E	<input type="checkbox"/>	E	<input type="checkbox"/>

### Section two: sequences

18		19		20	
A	<input type="checkbox"/>	A	<input type="checkbox"/>	A	<input type="checkbox"/>
B	<input type="checkbox"/>	B	<input type="checkbox"/>	B	<input type="checkbox"/>
C	<input type="checkbox"/>	C	<input type="checkbox"/>	C	<input type="checkbox"/>
D	<input type="checkbox"/>	D	<input type="checkbox"/>	D	<input type="checkbox"/>
E	<input type="checkbox"/>	E	<input type="checkbox"/>	E	<input type="checkbox"/>

### Section four: analogies

28		29		30	
A	<input type="checkbox"/>	A	<input type="checkbox"/>	A	<input type="checkbox"/>
B	<input type="checkbox"/>	B	<input type="checkbox"/>	B	<input type="checkbox"/>
C	<input type="checkbox"/>	C	<input type="checkbox"/>	C	<input type="checkbox"/>
D	<input type="checkbox"/>	D	<input type="checkbox"/>	D	<input type="checkbox"/>
E	<input type="checkbox"/>	E	<input type="checkbox"/>	E	<input type="checkbox"/>

21		22		23	
A	<input type="checkbox"/>	A	<input type="checkbox"/>	A	<input type="checkbox"/>
B	<input type="checkbox"/>	B	<input type="checkbox"/>	B	<input type="checkbox"/>
C	<input type="checkbox"/>	C	<input type="checkbox"/>	C	<input type="checkbox"/>
D	<input type="checkbox"/>	D	<input type="checkbox"/>	D	<input type="checkbox"/>
E	<input type="checkbox"/>	E	<input type="checkbox"/>	E	<input type="checkbox"/>

24	
A	<input type="checkbox"/>
B	<input type="checkbox"/>
C	<input type="checkbox"/>
D	<input type="checkbox"/>
E	<input type="checkbox"/>

Test 2 total:

Test 1 and 2 total:

## NON VERBAL REASONING ANALYSIS

Please use this sheet to help identify key areas for improvement.

**Name of Student:** \_\_\_\_\_

**Test one:**

**SECTION ONE (Q1-3)**

**Question type:**

Similarities and differences.

X denotes area for improvement	
--------------------------------	--

**SECTION TWO (Q 4-6)**

**Question type:**

Reflections

X denotes area for improvement	
--------------------------------	--

**SECTION THREE (Q7 - 9)**

**Question type:**

Relationships

X denotes area for improvement	
--------------------------------	--

**SECTION FOUR (Q10 - 14 )**

**Question type:**

Codes

X denotes area for improvement	
--------------------------------	--

**Test two:**

**SECTION ONE (Q 15-18)**

**Question type:**

Hidden shapes

X denotes area for improvement	
--------------------------------	--

**SECTION TWO (Q 18-24)**

**Question type:**

Sequences

X denotes area for improvement	
--------------------------------	--

**SECTION THREE (Q 25- 27)**

**Question type:**

Rotations

X denotes area for improvement	
--------------------------------	--

**SECTION FOUR(Q28 -30)**

**Question type:**

Analogies

X denotes area for improvement	
--------------------------------	--

<b>Overall score(%):</b>	
--------------------------	--

## **Better Tuition Non-Verbal Reasoning Answers**

Thank you for using our free Non-Verbal Reasoning download. If you found the paper useful, please [visit and like our Facebook page](#). You can also [follow us on Twitter](#).

### **TEST ONE:**

1. F
2. C
3. D
4. B
5. E
6. B
7. A
8. D
9. C
10. C
11. A
12. B
13. C
14. B

### **TEST TWO:**

15. E
16. C
17. B
18. C
19. C
20. A
21. A
22. D
23. D
24. D
25. B
26. B
27. B
28. D
29. C
30. C