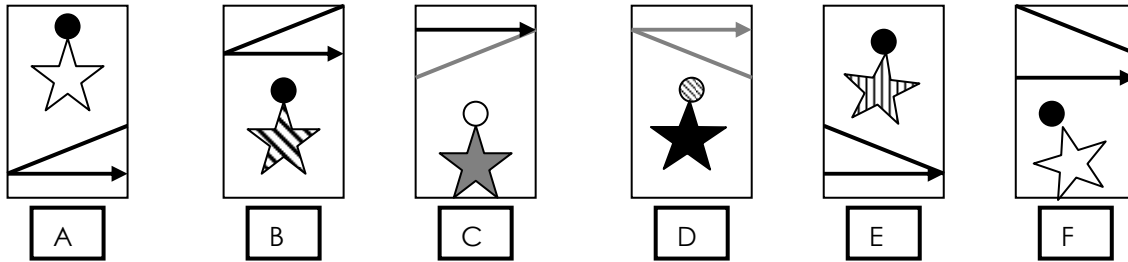


Non Verbal Reasoning Practice Paper: Test 1

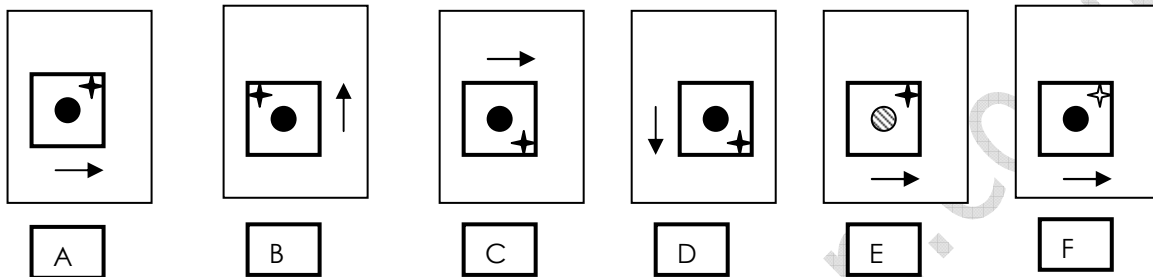
Section one: Similarities and Differences

Look at the shapes below. One of the shapes is most unlike the others. Choose which one.

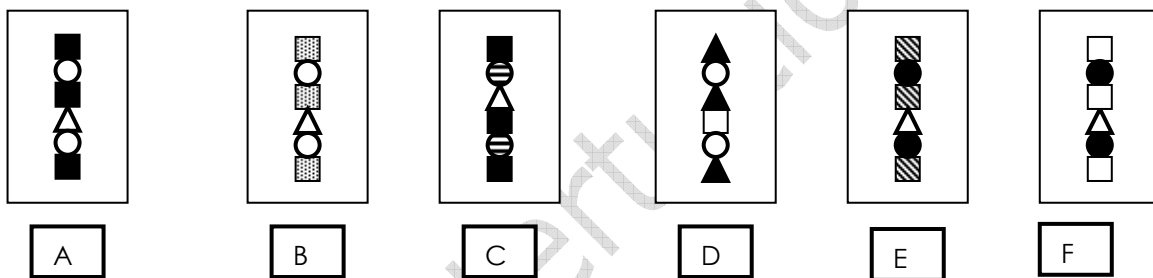
1



2

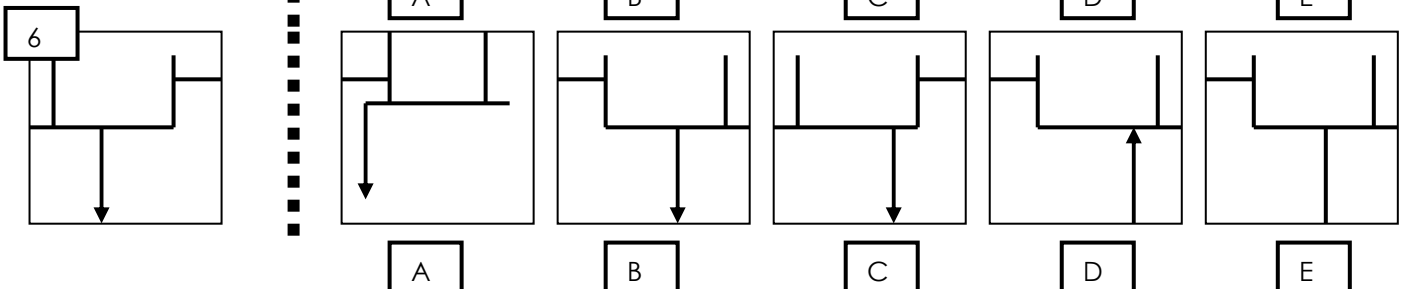
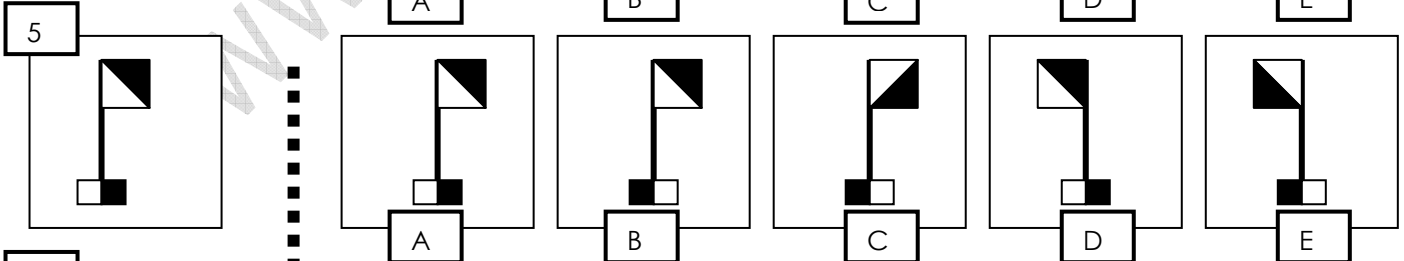
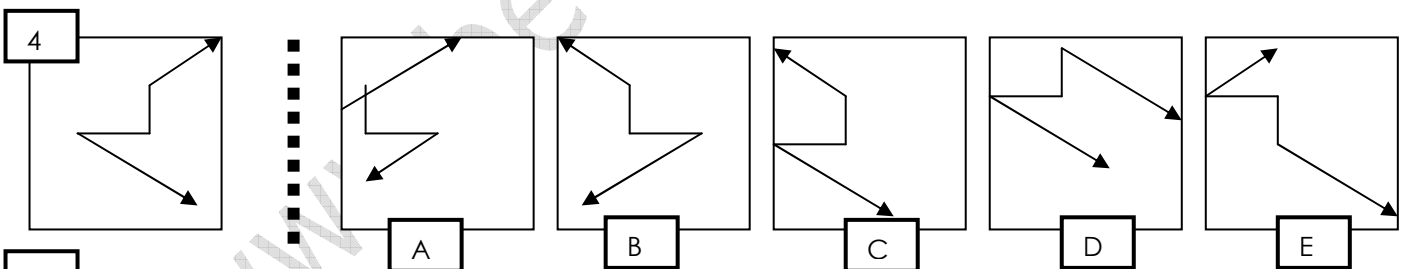


3



Section two: Reflections

Which shape on the right is the reflection of the shape on the left?



Section three: Relationships

From the given choices, work out which option best completes the group.

7

A B C D E

8

A B C D E

9

A B C D E

Section four: codes

Which code matches the shape or pattern given at the end of each line?

10

						IN	FS	LS	IS	ZF
IF	IS	ZU	ZG	LF	?	A	B	C	D	E

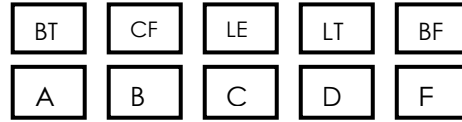
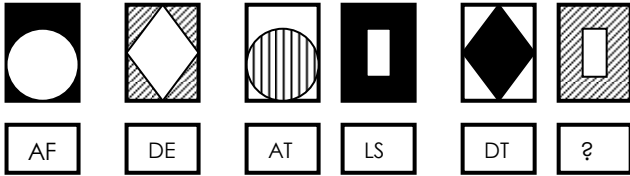
11

						RL	RS	BX	LX	BR
BS	BL	BX	BT	RX	?	A	B	C	D	E

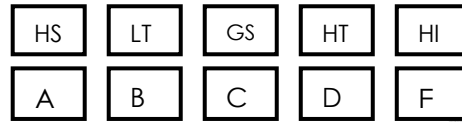
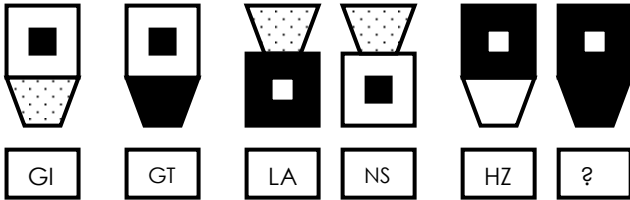
12

						BL	EL	BY	BZ	LZ
AZ	BZ	LY	AY	EZ	?	A	B	C	D	E

Which code matches the shape or pattern given at the end of each line? (continued)



14



END OF TEST: CHECK YOUR ANSWERS

www.bettertuition.co.uk

Non Verbal Reasoning Practice Paper: Test 2

Section one: hidden shapes

In which larger shape is the shape on the left hidden?

15

A B C D E

16

A B C D E

17

A B C D E

Section two: sequences

Which one comes next?

18

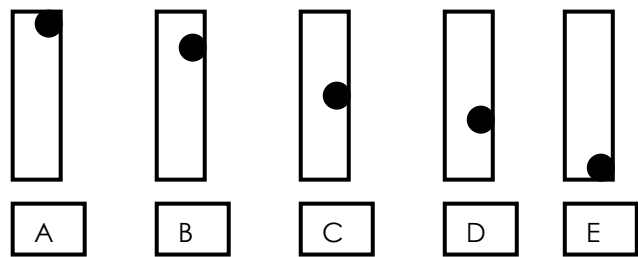
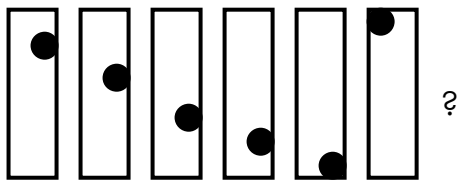
A B C D E

19

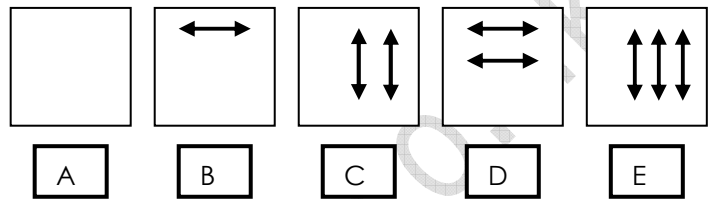
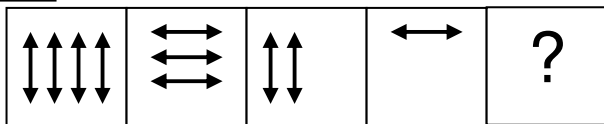
A B C D E

Which one comes next? (continued)

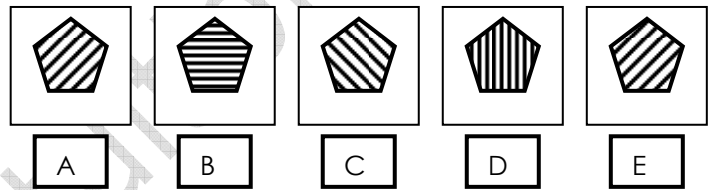
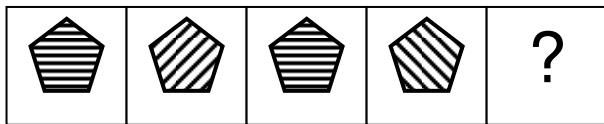
20



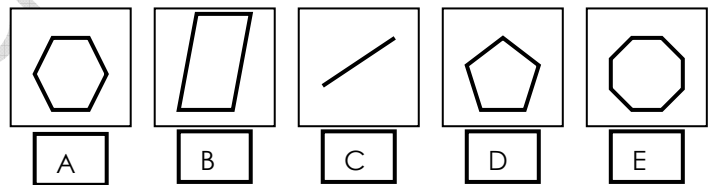
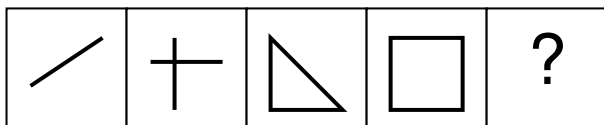
21



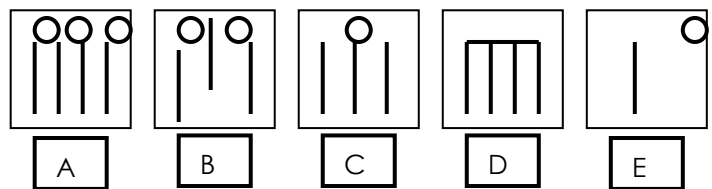
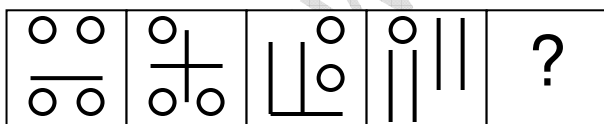
22



23









24



Section three: rotations

Only one of the figures on the right can be rotated to make the figure on the left. Choose which figure can be rotated to make the figure on the left.

25



A

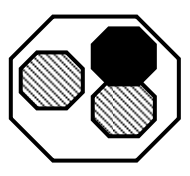
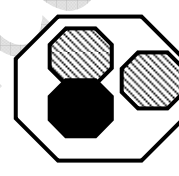
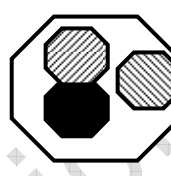
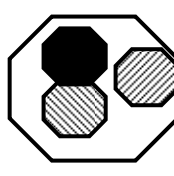
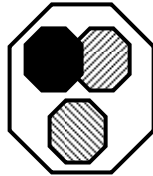
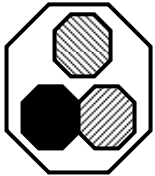
B

C

D

E

26



A


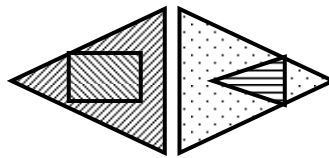

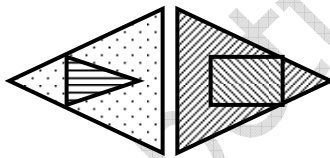
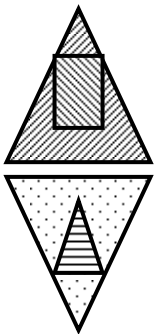
B

C

D

E

27



A

B

C

D

E

Section four: analogies

On the left of each question are two shapes. You must work out how they are connected. Now look at the third figure. Which of the five other figures that follow is related to the third in the same way as the second is to the first?

28

Options: A, B, C, D, E

29

Options: A, B, C, D, E

30

Options: A, B, C, D, E

END OF TEST: CHECK YOUR ANSWERS